



Time Allotted:: 30 Minutes.

Test - Instructions

Section:A  
Sectional Instruction

1 Find the missing number in the following number sequences! (1)

44 49 54 59 64 69 74 79 84

2 Find the missing number in the following number patterns! (1)

8 16 8 16 8 16 8 16 8

3 Find the missing number in the following number sequences! (1)

24 29 34 39 44 49 54 59 64

4 Find the missing number in the following number patterns! (1)

9 9 15 15 21 9 9 15 15 21 9

5 Find the missing number in the following number sequences! (1)

42 44 46 48 50 52  56 58 60

6 Find the missing object(s) in the following patterns! (1)

● ● ◆ ○ ○ ● ● ◆ ○ ○  ● ◆ ○ ○ ●

7 Find the missing object(s) in the following patterns! (1)

▲ ▲ ⊘ ⊘ ◆ ◆ ▲ ▲ ⊘ ⊘  ◆ ▲ ▲ ⊘ ⊘



8 Find the missing number in the following number sequences! (1)

31 36 41 46 51 56 61 66 71

9 Find the missing number in the following number patterns! (1)

5 10 10 16 5 10  16 5 10 10 16

10 Find the missing number in the following number sequences! (1)

36 41 46 51 56 61 66 71 76

11 Find the missing object(s) in the following patterns! (1)



12 Find the missing number in the following number sequences! (1)

5 10 15 20 25 30 35 40 45

13 Find the missing object(s) in the following patterns! (1)



14 Find the missing number in the following number patterns! (1)

1 1 10 17 1 1 10 17 1 1 10

15 Find the missing object(s) in the following patterns! (1)







**Answer Key**

1. 44 49 54 59 64 69 74 79 84

2. 8 16 8 16 8 16 8 16 8

3. 24 29 34 39 44 49 54 59 64

4.

- 9 9 15 15 21 9 9 15 15 21 9
5. 42 44 46 48 50 52  56 58 60
6. 
7. 
8. 31 36 41 46 51 56 61 66 71
9. 5 10 10 16 5 10  16 5 10 10 16
10. 36 41 46 51 56 61 66 71 76
11. 
12. 5 10 15 20 25 30 35 40 45
13. 
14. 1 1 10 17 1 1 10 17 1 1 10
15. 